



Negative Number Maze

I can order negative numbers.



Start at any of the 3 aliens.

Begin with the number on the alien, and draw a trail of negative numbers to their planet using the rule they have given you.


-20

-12


-11

| | | | | | | | | |
|-----|-----|-----|-----|-----|-----|----|-----|-----|
| -19 | -18 | -17 | -11 | -19 | -20 | -6 | -9 | -10 |
| -20 | -13 | -10 | -16 | -8 | -15 | -8 | -13 | -15 |
| -16 | -6 | -9 | -15 | -13 | -10 | -7 | -5 | -2 |
| -12 | -8 | -6 | -20 | -14 | -6 | -3 | -10 | -17 |
| -7 | -10 | -15 | -13 | -8 | -11 | -5 | -7 | -9 |
| -3 | -6 | -9 | -15 | -12 | -10 | -4 | -1 | -5 |
| -2 | -5 | -1 | -9 | -11 | -8 | -2 | -3 | -2 |

Look for negative numbers decreasing by 1s



Look for negative numbers decreasing by 1s



Look for negative numbers decreasing by 1s

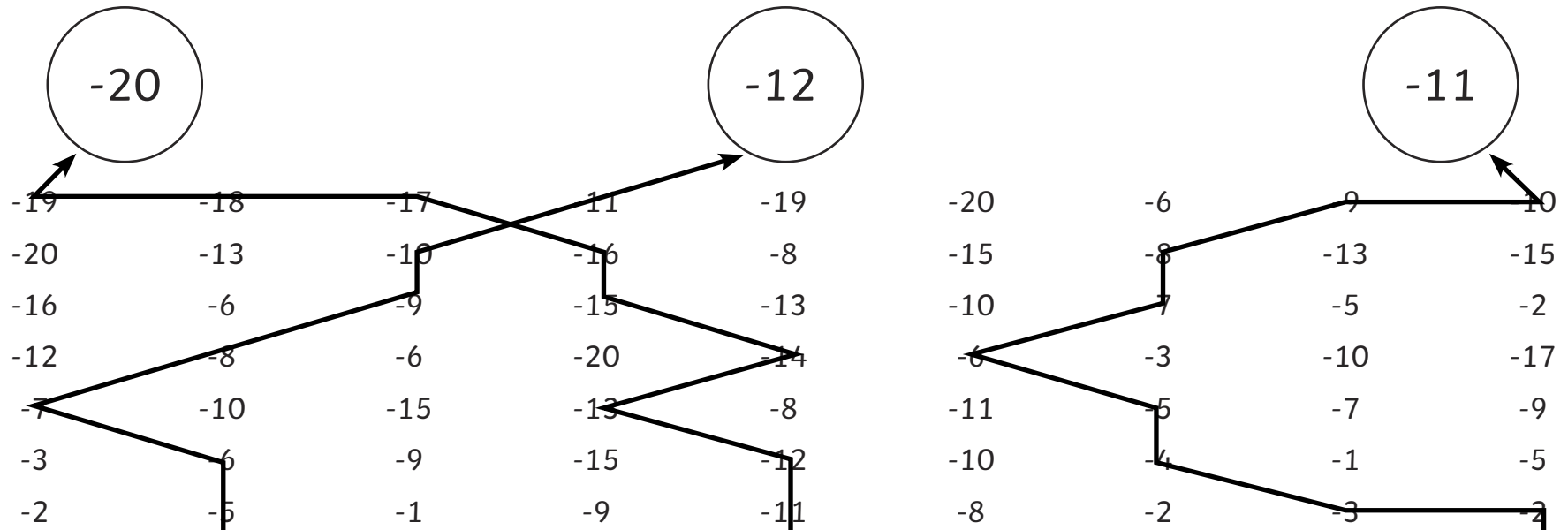


Negative Number Maze Answers

I can order negative numbers.

Start at any of the 3 aliens.


Begin with the number on the alien, and draw a trail of negative numbers to their planet using the rule they have given you.




Look for negative numbers decreasing by 1s



Look for negative numbers decreasing by 1s



Look for negative numbers decreasing by 1s



Negative Number Maze

I can order negative numbers.

Start at any of the 3 aliens.

Begin with the number on the alien, and draw a trail of negative numbers to their planet using the rule they have given you.


-68

-95


-35

| | | | | | | | | |
|-----|-----|-----|-----|-----|-----|-----|-----|-----|
| -63 | -58 | -45 | -65 | -85 | -90 | -80 | -32 | -33 |
| -55 | -53 | -48 | -90 | -80 | -75 | -27 | -25 | -31 |
| -43 | -35 | -25 | -43 | -45 | -25 | -65 | -29 | -30 |
| -10 | -15 | -23 | -38 | -21 | -23 | -55 | -40 | -45 |
| -5 | -13 | -17 | -19 | -33 | -25 | -45 | -35 | -30 |
| -7 | -15 | -12 | -25 | -28 | -23 | -20 | -25 | -10 |
| -13 | -9 | -5 | -15 | -18 | -20 | -25 | -20 | -15 |

Look for negative numbers decreasing by 2s



Look for negative numbers decreasing by 5s



Look for negative numbers decreasing by 10s

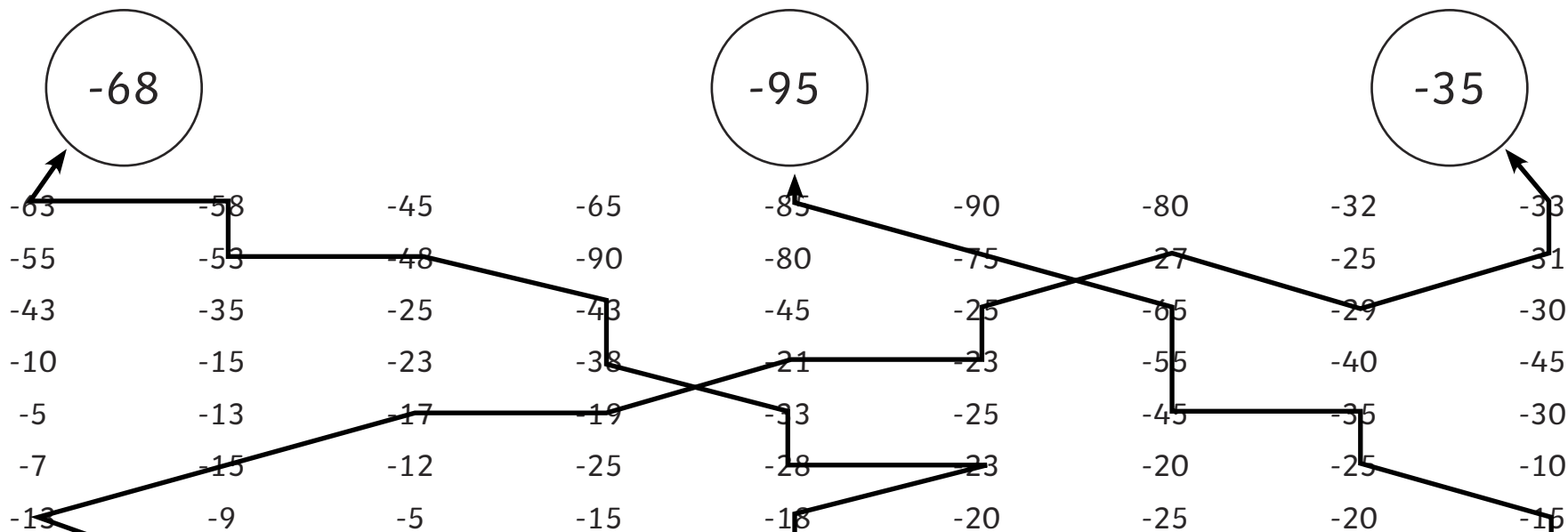


Negative Number Maze Answers


I can order negative numbers.

Start at any of the 3 aliens.


Begin with the number on the alien, and draw a trail of negative numbers to their planet using the rule they have given you.



Look for negative numbers decreasing by 2s



Look for negative numbers decreasing by 5s



Look for negative numbers decreasing by 10s





Negative Number Maze

I can order negative numbers.



Start at any of the 3 aliens.

Begin with the number on the alien, and draw a trail of negative numbers to their planet using the rule they have given you.


-110

-72


-29

| | | | | | | | | |
|------|-----|-----|-----|-----|-----|-----|-----|-----|
| -101 | -83 | -72 | -81 | -65 | -71 | -27 | -25 | -31 |
| -92 | -74 | -65 | -58 | -17 | -19 | -23 | -21 | -17 |
| -47 | -56 | -37 | -47 | -51 | -23 | -17 | -19 | -15 |
| -23 | -30 | -47 | -44 | 3 | -1 | -15 | -13 | -12 |
| -16 | -17 | -38 | -29 | 7 | -5 | -9 | -11 | -9 |
| -7 | -9 | -5 | 11 | -20 | -24 | -6 | 7 | -7 |
| -12 | -2 | 12 | 15 | 23 | -11 | -2 | -9 | 16 |


Look for numbers decreasing by 7s



Look for numbers decreasing by 4s



Look for numbers decreasing by 9s





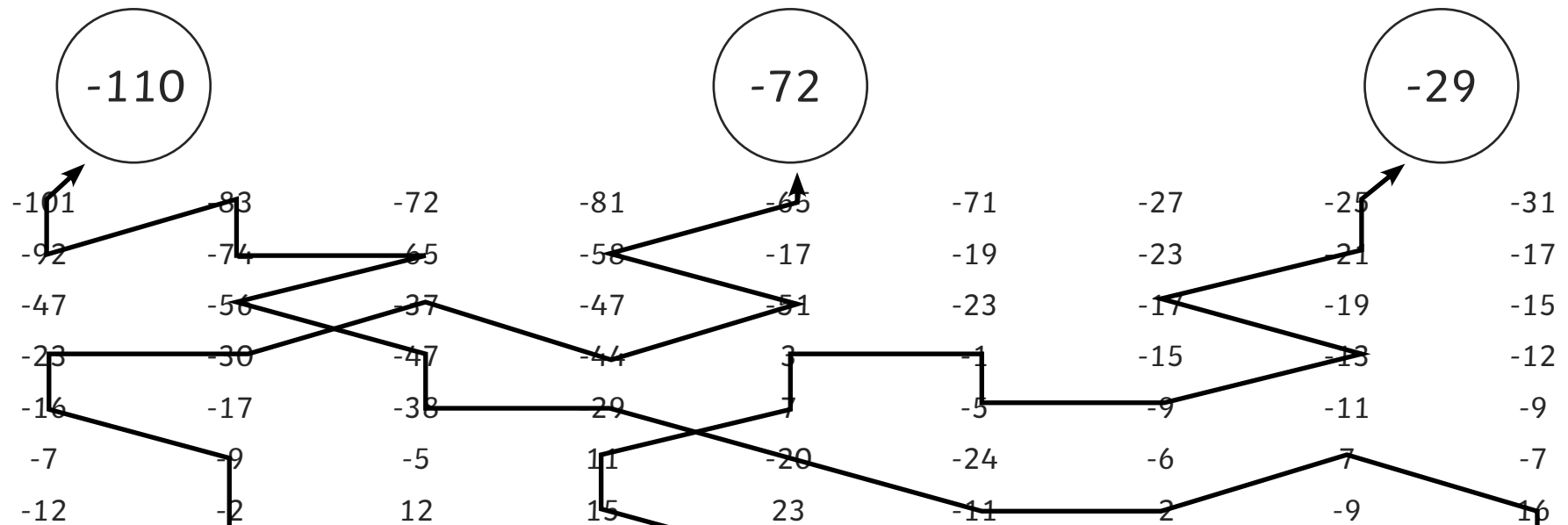
Negative Number Maze Answers

I can order negative numbers.



Start at any of the 3 aliens.

Begin with the number on the alien, and draw a trail of negative numbers to their planet using the rule they have given you.



Look for numbers decreasing by 7s

5

Look for numbers decreasing by 4s

19

Look for numbers decreasing by 9s

25